


Time: 10 Minutes

Paper Math 2

Total Marks: 10


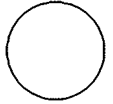

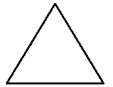
6th Month, 1st Week, 2nd Day

Syllabus: Complete the following. Pg # 136



Q.2. Complete the following table by writing the name and number of shapes given above. (10)

اور پر دی گئی تصویر کے مطابق تصویر کا نام لکھیں اور تصویر کی تعداد لکھیں۔

Shape	شکل	Name	نام	Number of shape	شکل کی تعداد
					
					
					
					


Time: 10 Minutes

Paper Math 2

Total Marks: 10

6th Month, 1st Week, 2nd Day

Syllabus: Complete the following. Pg # 136



Q.2. Complete the following table by writing the name and number of shapes given above. (10)

اور پر دی گئی تصویر کے مطابق تصویر کا نام لکھیں اور تصویر کی تعداد لکھیں۔

Shape	شکل	Name	نام	Number of shape	شکل کی تعداد
